



11. LINES AND LINES

4 TYPES OF LINES

Standing Lines




Sleeping Lines



AussieChildcareNetwork.com

Sleeping (or) horizontal line

Standing (or) vertical line



Slanting line

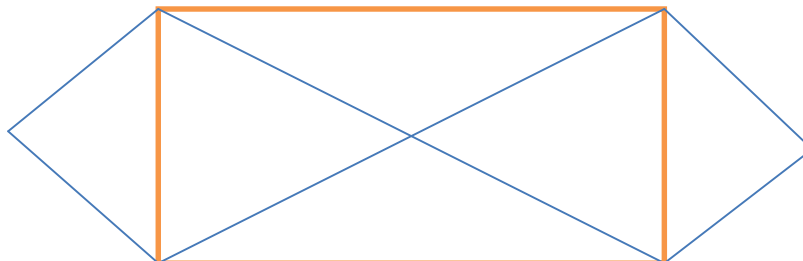
Curved line



I. COUNT AND WRITE THE FOLLOWING

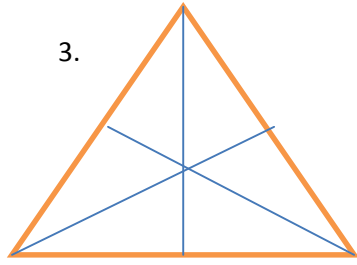


1. STANDING LINE= 2
 2. SLEEPING LINE=3
 3. SLANTING LINE= 2
- 2.



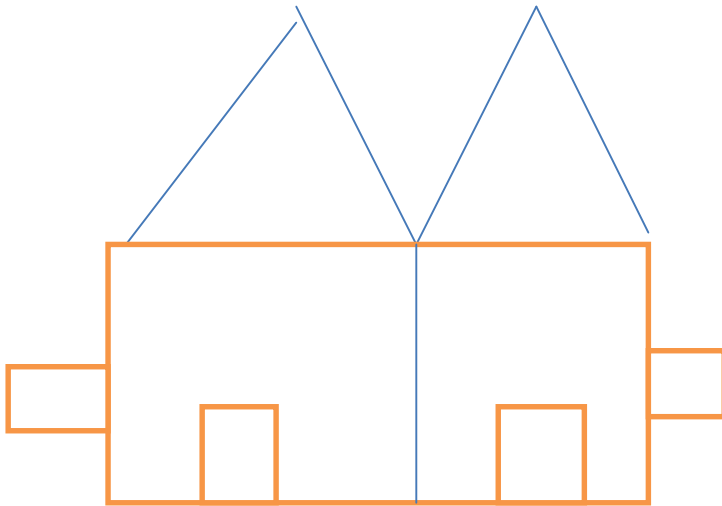
1. STANDING LINE= 2
2. SLEEPING LINE=2
3. SLANTING LINE=6

3.



SLEEPING LINE=1
STANDING LINE=1
SLANTING LINE=4

4.



SLEEPING LINE=9

STANDING LINE=9

SLANTING LINE=4

II. DRAW ANY TWO PICTURES USING TYPES OF LINES.

1.



2.



Step 1

III. DRAW A SMALL RANGOLI BY USING TYPES OF LINES.

