



KENDRIYA VIDYALAYA GANDHIGRAM ,
HALF YEARLY MODEL PAPER 2018-19

SUBJECT:MATHS

CLASS:IV SEC:

TIME:3 HOURS

DATE:

NAME OF THE STUDENT:

ROLLNO:

Invigilator's Sign

Evaluator's Sign

Maximummarks:80

Marks obtained:

READ THE INSTRUCTIONS CAREFULLY.

1. There are 3 parts in the question paper.
2. Part - A (Q.No. 1-22) contains of 22 questions of one mark each.(Very Short Answer type).
3. Part - B (Q.No 23-36) contains of 14 questions of 2 mark each.(Short Answer Type)
4. Part - C (Q.No 37-42) contains of 5 marks each.(Long Answer Type).

PART -A VERY SHORT ANSWER 22×1=22

FILL IN THE BLANKS.

1. In injections medicines will be taken in _____.
a)kl b)ml c)l
2. An half past the hour, the minutes hand is on _____.
a)3 b)6 c)9
3. $40 \times 12 =$ _____.
a)360 b)450 c)480
4. When we see the objects from the flight, it is called as _____.
a)front view b) top view c) back view
5. _____ 20 paise make 1 rupee.
a) 2 b) 4 c) 5
6. One hour after 11.20 am is _____.
a)12.40 am b) 12.20 pm c)1.20 pm

7. $4\text{m } 15\text{cm} + 2\text{m } 20\text{cm} =$ _____ m _____ cm.

- a) 6 m 35 cm b) 5 m 35 cm c) 6 m 45 cm

8. The Railway time shows 17.30 hours for the time _____ in the evening.

- a) 7.30 b) 5.30 c) 6.30

9. $\text{₹ } 3.75 - \text{₹ } 0.50 =$ _____.

- a) ₹3.25 b) ₹2.25 c) ₹2.50

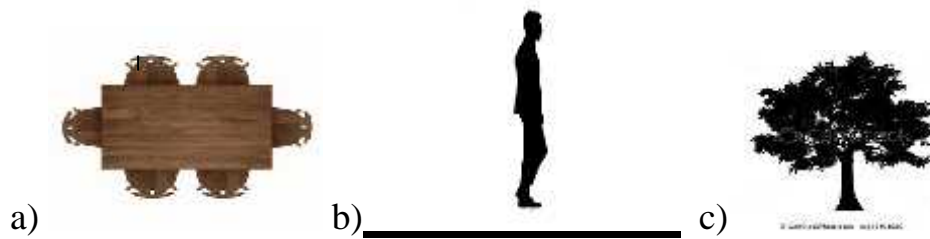
10. The exact number between 100 and 200 = _____

- a) 155 b) 150 c) 120



- a) ₹550 b) ₹520 c) ₹650

12. Which is the top view? _____.



13.  Write down the correct answer?

- a) 11.10 b) 2.50 c) 10.10

14. 1kg newspaper cost is Rs.5.


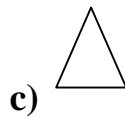
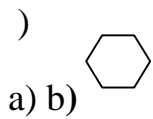
30 g newspaper cost is Rs. _____.

a)Rs.120

b) Rs. 150

c) Rs. 160

15. Which of these is a face of a brick?



16. $100 \div 10 = ?$

a) 100

b) 1

c) 10

17. The basic unit for length is _____.

a)cm

b)m

c) km

WRITE TRUE OR FALSE

18. one litre = 400 ml+ 200 ml+200ml --

19.The brick has 4 faces --

20.Greatest 4 digit number is 9999 --

21. $20 \times 0 = 0$ --

22. $33 \text{ km} - 2 \text{ km} = 30 \text{ km}$ --

PART-B SHORT ANSWER

14×2=28

23. **Add** 56km 235 m and 71km 707 m

24. $2000+540-196$

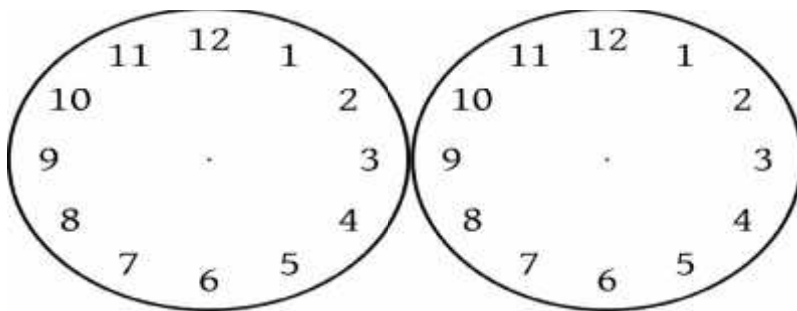
25. **Change into 24 hours clock time.**

a) 6.05 pm =

b) 11.40 pm =

26. 200 less than 6968

27. **Draw the hands for the given time.**



a) quarter past 3 b) 9.35

28. Calculate the number of days between December 16 and December 31

29. Draw the side view of the glass

30. Cost of 1 kg sugar is Rs. 38.50. What is the cost of 8 kg sugar?

31. Convert into ml and subtract.

5 L 675 ml from 12 L 125 ml

32. a) Four 50 rupees note ,six 20 rupee notes, eight 2 rupee notes,five coins of 50 paise =

b) $4 \times$  $+ 5 \times$  $+ 8 \times$  =

33. Add: 120L 256 ml and 179 L 744 ml.

34. Match the following :

a) 4th June 1975 - 24.8.2018

b) 20th December- 15. 8. 2018

c) Independence day -20.12.2007

d) August 24 2018 - 4.6.1975

35. Draw the doll. Its one hand will be the double of its another hand.

36. Use the digits and make the greatest number and the smallest number.

Digits	Greatest number	Smallest number
3, 8, 1		
1, 5, 3, 6		

PART-CLONG ANSWER **6×5=30**

37. Mrs.Raji bought 66L milk in April month and 60 L 200 ml milk in May month. How much milk did she buy in these two months?

38.a) Find the sum and difference of the 6 digit smallest number and the 5 digit greatest number?

39. Fill the missing time.

12 hours clock 24 hours clock

1. 8.15 pm _____
2. _____ 22.20 hrs
3. 6.40 pm _____
4. 4.55 pm _____
5. _____ 19.05 hrs

40. Read the price list and calculate the cost.

S.no	Item	Quantity	Cost per item(Rs)	Total cost
1	Pen	6	12	
2	Eraser	6	5	
3	Pencil	12	10	
4	Fevistick	7	22	
5	Note book	8	35	

41. Rajni gave Rs. 1000 to purchase 5 shirts. What is the cost of each shirt?

42. Amar wants to buy 1 kg Oranges for Rs.45 and Bananas for Rs. 15. He has Rs 50. How much money does he need to buy the fruits?

