



KENDRIYA VIDYALAYA GANDHIGRAM ,

MODEL PAPER

SUBJECT:EVs

CLASS:III

SEC:

TIME:2.5HOURS

DATE:

NAME OF THE STUDENT:

ROLLNO:

Invigilator's Sign

Evaluator's Sign

Maximummarks:80

Marks obtained:

Instructions:


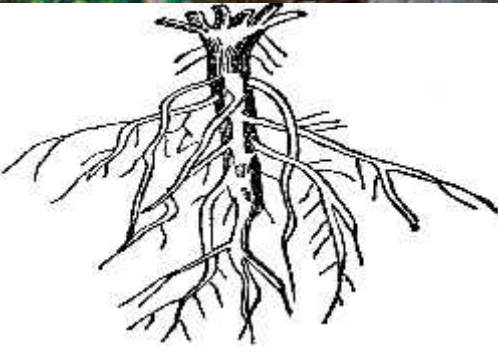
1. All questions are compulsory.
2. PART -A Questions from 1 to 30 carries 1 mark each.
3. PART-B Questions from 31 to 40 carries 2 marks each.
4. PART-C Questions from 41 to 46 carries 5 mark each.

PART-A

VERY SHORT ANSWER QUESTIONS

30x1=30

Identify the following pictures and write one sentence about it.

Sr. no	Picture	Write one sentence about it
1.		<hr/> <hr/> <hr/> <hr/> <hr/> <hr/> <hr/> <hr/>
2.		<hr/> <hr/> <hr/> <hr/> <hr/> <hr/> <hr/> <hr/>

3.		<hr/> <hr/> <hr/> <hr/> <hr/> <hr/>
4.		<hr/> <hr/> <hr/> <hr/> <hr/> <hr/>
5.		<hr/> <hr/> <hr/> <hr/> <hr/> <hr/>
6.		<hr/> <hr/> <hr/> <hr/> <hr/> <hr/>

Fill in the blanks:

7. Root absorbs _____ and minerals from soil..
8. _____ is the cheapest mean of transport.
9. Elderly people need special _____ and _____.
10. _____ protects the birds from weather.
11. _____ is the main source of water.
12. _____ controls the traffic signal.

Write true or false:

13. Dog, rat and tiger are water animals. (_____)
14. Blind people are those who cannot hear. (_____)

15. Eagle is our national bird. (_____)
 16. Small grains are called millets. (_____)
 17. Plants can live without water. (_____)
 18. shrubs are smaller than trees. (_____)

GIVE TWO EXAMPLES OF EACH:

19. Food items made from rice : _____
 20. Two aquatic animals : _____
 21. Land transport : _____
 22. Fuels used for cooking food : _____
 23. Places where patterns of plants are seen : _____
 24. Our helpers: _____

V. DO AS DIRECTED.

- 25) Bus , car , bike , boat (Encircle the odd man)
 26) We go to school not only to gain knowledge but also to get _____ (Complete the sentence)
 27) It is an indigenous art of India _____ (Name it)
 28) Heavy rain leads to _____ (flood/ drought)
 29) Sign language is used by some people. (Who uses this? _____)
 30) Name two medicinal plants. _____ (Write any two)

PART B

SHORT ANSWER QUESTIONS

10X2M=20M

31. Name the relations:
 Father 's son : _____
 Mother 's Brother : _____
32. How does a beak help a bird?
 Ans: _____
33. What are the uses of water?
 Ans: _____
34. How rainbow is formed?
 Ans: _____

35. Write work place of following people:

Our helpers

place of work

- 1. Fireman
- 2. Farmer
- 3. Teacher
- 4. Postman

36. Classify the vehicles into the following:

**MOTORCYCLE, BOAT, HELICOPTER, CAR,
PARACHUTE, SUBMARINE, BUS**

**LAND
TRANSPORT**

**WATER
TRANSPORT**

**AIR
TRANSPORT**

37. Write the process of making lemon water.

Ans: _____

38. Write any two sense organs and also write their function.

Ans: _____

39. Write two foods that a small child eat.

Ans: _____

40. Write two characteristics of birds.

Ans: _____

PART-C
LONG ANSWER QUESTIONS

6x5M=30M

41. Draw a kutcha house and write materials used for making it.

Materials used for making a kutcha house:

_____, _____, _____, _____, _____

42.a) Write any three properties of water.


Ans: _____

b). Write three forms of water.

Ans: _____

43.a) Draw your favourite bird and label its body parts.

b) Observe the beak of the bird and identify the bird.



44. Identify the food and write the method of cooking used to make that food:

FRYING, BAKING, BOILING, ROASTING, STEAMING



45. a). Identify the oldest means of transport and name them:

**Bullock cart, Bus, Car, Electric bike, Electric train,
Tonga, Boat, Tram, Ship, Aero plane, palanquin**

Oldest means of transport:

b). Identify the pictures of modern means of transport and write its name:

BULLET TRAIN

SHIP

AEROPLANE





46. a) Name the following states in which these rivers flow:

River

State

1. Narmada

2. Yamuna -

3. Krishna -

4. Godavari -

5. Ganga -

b). Mark the above states on the Indian political map.

