

CLASS 2

MATHS

7. JUGS AND MUGS




I. Tick (✓) the objects that hold more than 2 litres of water. Guess and (X) the objects that hold less than 1 litre of water.

1.   

X X

2.   

X X


3.   


 X


II. tick (✓) the one that holds more water

1.  







 X

2.  X ✓

3.  ✓ X

4.  X ✓

III. Arrange the following objects in order of capacity starting from the smallest:-

a)  b)  c)  d)  e)  f) 

Answer

1. Syringe
2. Cup
3. Glass
4. Jug
5. Bucket
6. Tank

IV. fill in the blanks appropriately:

1. To make  of orange juice we need  oranges for  of orange juice we need 16 oranges.

2.  fill  . We need 12 glasses to fill  .

 .

V. Choose the most suitable unit of capacity litre (l) or millilitre (ml) of the following.

1. A cup of tea millilitre.
2. A bucket of water litre.
3. An eye drop millilitre.
4. A glass of milk millilitre.
5. A can of Petrol litre.
6. A bottle of syrup millilitre.