

KENDRIYA VIDYALAYA GANDHIGRAM DINDIGUL

NOTES

CLASS: III A & B

SUBJECT: MATHEMATICS

CHAPTER: WHERE TO LOOK FROM

MONTH: APRIL

QUES 1: Some pictures are drawn below. Imagine how these things will look if seen from the top and side.

Ans :Side view

Top view



QUES 2 : Write the correct view of the following pictures:



Front view



side view



front view



Side view

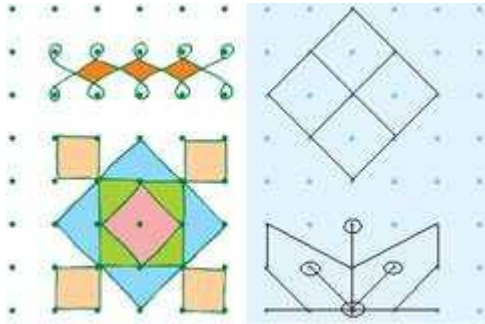


side view

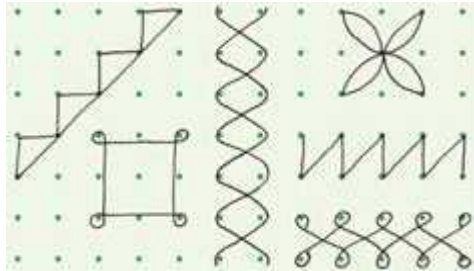


top view

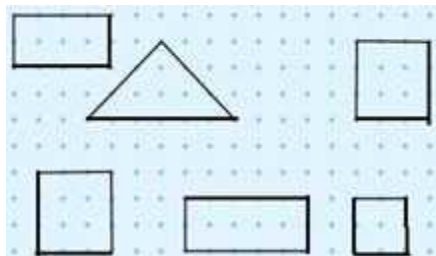
Ques3. You can also try and use the dots given below to make patterns. Two examples have been drawn here.
 Ans.



Ques 4. Copy these shapes on the dot grid. Note that some lines in the shapes are straight and some are not.
 Ans.



Ques 5. Complete these figures to make squares and rectangles.
 Ans.



Ques 6

Using a dotted line, can you divide the following pictures into two similar halves?



7. Can we repeat the painter's trick, while drawing pictures of the following?



Ans. The painter's trick, cannot be repeated while drawing the above pictures.


Ques 8. If you ask the painter to draw things which cannot be divided into two similar mirror halves, then he cannot play the trick. Draw three more such things which do not have similar mirror halves.

Ans. Three things that cannot be divided into two similar mirror halves are as under:

Jug

sauce pan


knife



Ques 9. Can you guess these letters from their halves?



Ans. The respective letters are A, C, H, U, B and K.



Making A Mask



