



Name: _____

CLASS:III SEC: _____

ROLL No. _____

Invigilator's Sign: _____

Marks Obtained: _____

Evaluator's Sign: _____

Read the instructions carefully

1 There are 3 parts in the question paper.

2 Section A (QNo 1-22) consists of 22 questions of 1 mark each (Very Short Answer Type)

3 Section B (QNo 23-36) consists of 14 questions of 2 marks each (Short Answer Type)

4 Section C (QNo. 37-42) consists of 6 questions of 5 mark each (Long Answer Type)

PART – A**22 X 1= 22****CHOOSE THE CORRECT ANSWER:**

1) 1 kilometer= _____

- a) 100 meter b) 10 meter c) 1000 meter d) 10000 meter

2) Find the heaviest animal _____

- a) Monkey b) Cow c) Dog d) Elephant

3) $12 \times 6 =$ _____

- a) 52 b) 62 c) 82 d) 72

4) Insert correct sign $11 \square 4 = 44$

- a) + b) - c) X d) ÷

5) What will come next? 4, 6, 8, 10, _____

- a) 11 b) 12 c) 13 d) 14

6) Find the odd number _____

- a) 20 b) 19 c) 14 d) 86

7) 2 Liter= _____

- a) 2000 ml b) 200 ml c) 10 ml d) 500 ml

8) $63 \div 7 =$ _____

- a) 9 b) 8 c) 7 d) 10

9) Cost of 3 balloons is 12 Rs. Cost of 1 Balloon is _____

- a) 5 b) 4 c) 3 d) 6

10) _____ chart is a chart or graph that presents categorical data with rectangular bars with heights or lengths proportional to the values that they represent.

- a) bar b) pie c) growth d) none of above

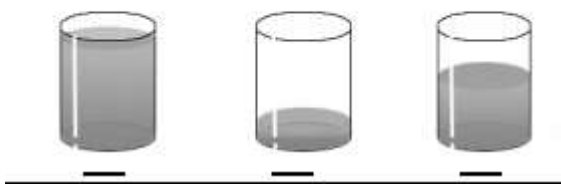
ANSWER THE FOLLOWING:

11) 6.75 Rs. = _____ paise

12) Difference of 112.00 Rs. And 101.20 Rs. _____

13) Tick on correct glass.

Which glass holds the least juice?



14) Decode secret message: NBOHP = _____

15) Find the pattern.



16) Write the name of items which are less than 1 Kg _____

17) Cost of 1 pencil is 4 Rs. Find the cost of 9 pencils _____

18) There is Orange Juice glass, whose capacity is 800 ml. You drink half. How much juice left in the glass? _____

19) Make equal group of 3



$$\square / \square = \square$$

20) Count the money.

$$\boxed{\text{Rs. 30}} + \boxed{\text{Rs. 20}} + \textcircled{65 \text{ paise}} =$$

(Answer the questions from 21 to 22 according to given table)

Name of Hobbies	Number of Student
Playing Cricket	17
Singing	11
Dancing	08
Drawing	15
Reading books	04

21) Which is the most popular hobby?

22) How many more student like Singing than Dancing?

PART – B

14 X 2 = 28

23) Tick the object that will weigh more.





24) Add 65 kg 500 + 44 Kg 400 g

25) $6+6+6+6+6=$ ___ X ___ = ___

26) Write the multiplication fact of the following.

Number	Multiplication Facts	
42	7X6	21X2
16		
48		

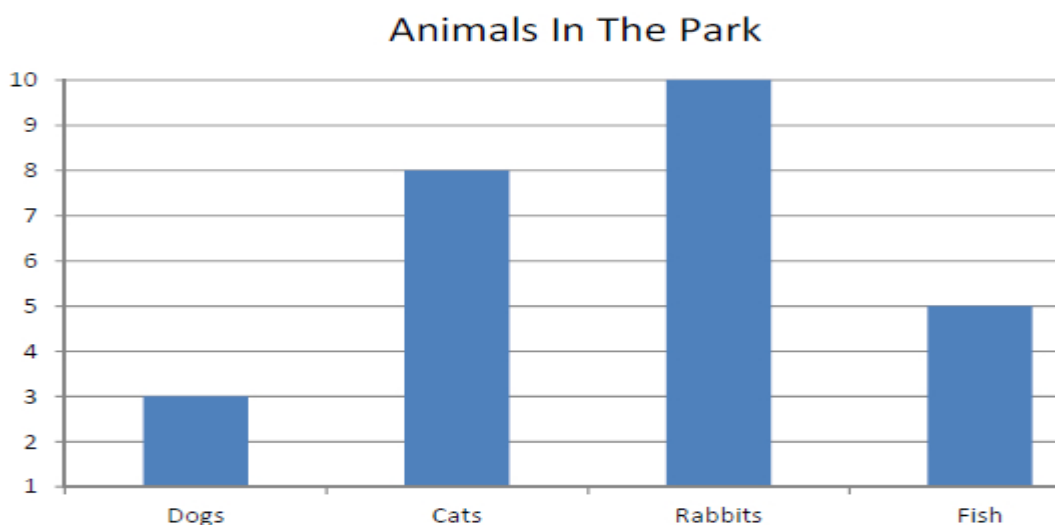
27) If we add 1 to an even number we get a _____ number.

28) Write all the odd numbers between 10 and 20. _____

29) Complete the following table

Litre	Mili Litre
One Litre	1000
Half Litre	
One fourth Litre	

(From question 30 to 31 answer according to below figure)



30) Are there more cats or more Dogs? _____

31) How many Rabbits are there in the park? _____

32) Find the Sum of Rs. 500.00 and Rs. 112.21 and Subtract this Sum from Rs. 985.45

33) Convert the following into Rupee.

a) 375 paise=_____Rs.

b) 850 paise=_____Rs.

34) Cost of 4 books is 20 Rs. Find the cost of 1 book. _____

35) A fan has 3 blades then 45 fans have how many blades?

36) Complete the pattern.

A 1 C 3 E 5 _____


PART – C

6 X 5 =30

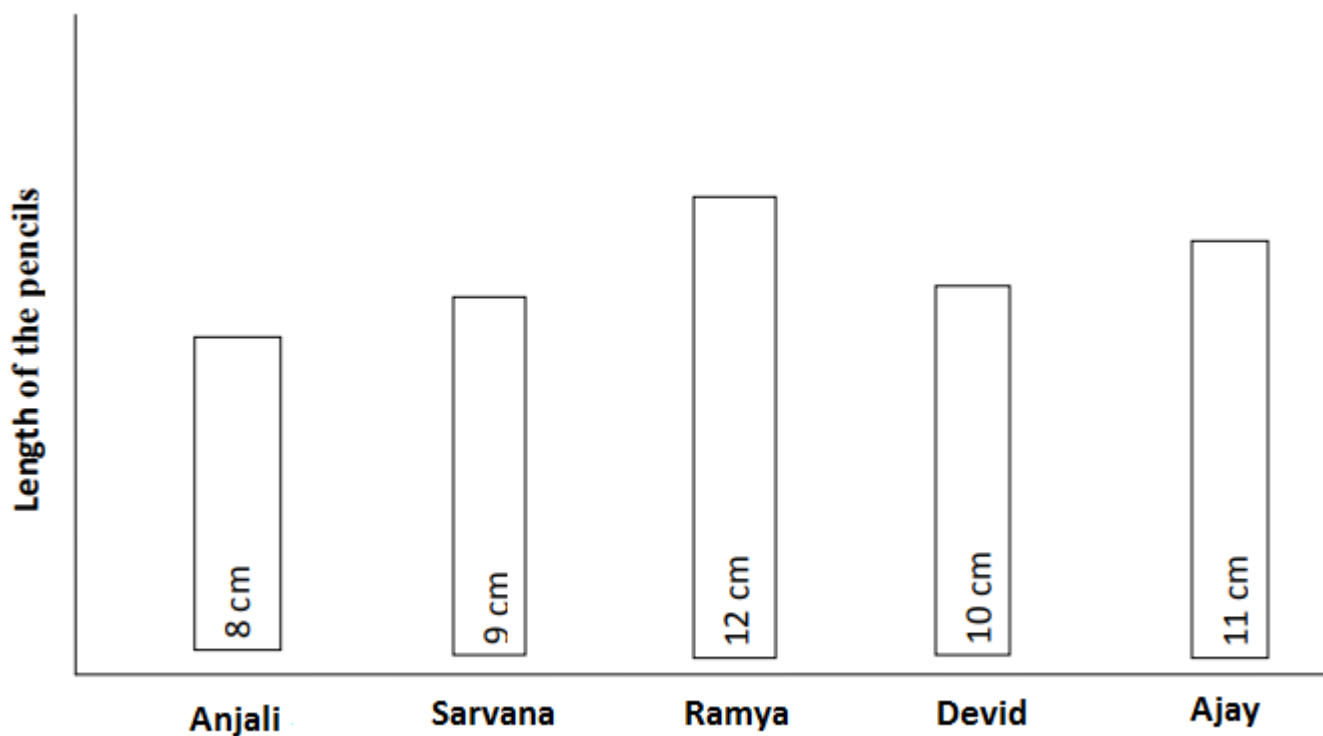
37) Complete the bill and write the total money spent

Item	Cost per Item	Quantity	Cost=(Cost per item X Quantity)
Water bottle	15	2	
Pencil	4	5	
Mug	20	2	
Total			

38) Complete the multiplication tree.



39) Study the below chart and answer the following.



- a) The length of Sarvana's pencil is cm
- b) The length of Devid's pencil is cm
- c) Whose pencil has highest length? _____
- d) The difference between the length of pencils of Anjali and Ajay is _____ cm.

40) Cost of 10 Mangoes is 30 Rupee. Find the cost of 15 Mangoes.

41) Arrange the given names in alphabetical order

Names in random order	Names in arranged order
1. Sarjana	1. Agathya
2. Velmurugan	2.
3. Kanishka	3.
4. Prasanth	4.
5. Agathya	5.
6. Jeyahari	6.
7. Logesh	7.
8. Pirithika	8.

42) Solve the following.

a) 45×12

b) $45 \div 9$