

KENDRIYA VIDYALAYA GANDHIGRAM DINDIGUL

WORKSHEET

CLASS:II ____

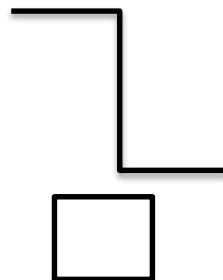
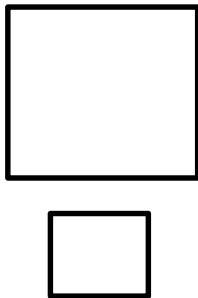


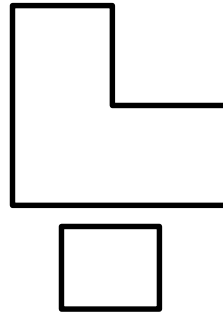
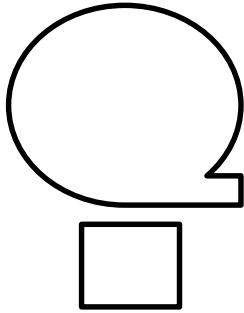
TOPIC: LINES AND LINES

SUB: MATHS

NAME: _____


DATE: _____

1. Tick (✓) the objects with straight lines and cross(x) the objects with curved lines.




2. Draw the lines.


a) Slanting line



b) Sleeping line



c) Standing line




3. Count the number of lines in the following figure.



a) Standing lines _____

b) Sleeping lines _____

c) Slanting lines _____



a) Standing lines _____

b) Sleeping lines _____

c) Slanting lines _____

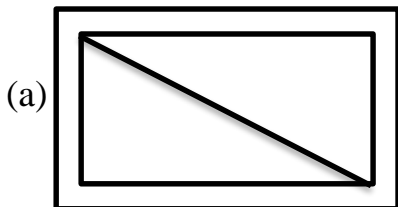


a) Standing lines _____

b) Sleeping lines _____

c) Slanting lines _____

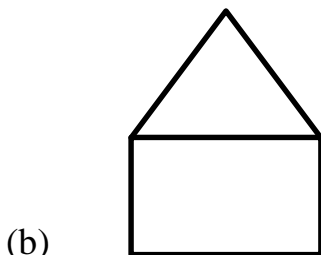
4. Count the number of horizontal lines, vertical lines and slanting lines in the blanks.



Horizontal line: _____

Vertical Line: _____


Slanting line: _____



Horizontal line: _____

Vertical Line: _____

Slanting line: _____



Horizontal line: _____

Vertical line: _____

Slant line: _____

