


### Lesson 3 – How much can you carry?

Which of the two things will make the see-saw go down?



Simran's father wants to move some things from the store of their house to the kitchen.

She wants to help her father.



Guess which bags simran can carry. Guess who can carry what –

- a) Her father? Atta.
- b) Her mother? Rice.
- c) Her younger sister? Ghee.
- d) Can simran carry any two of these bags together? Yes.
- e) If yes, which ones? Salt and Ghee.

**I) Fill in the blanks:**



1. Leaf is lighter than tree.
2. Butterfly is lighter than elephant.
3. Ball is lighter than bat.
4. Mat is lighter than table.
5. Balloon is lighter than water bottle.
6. Rat is lighter than cot.
7. Cake is heavier than chocolate.
8. Cow is heavier than goat.
9. Horse is heavier than bee.
10. Lock is heavier than key.
11. School bag is heavier than book.
12. Box is heavier than pencil.

**HW- Fill in the blanks: {heavier/lighter}**

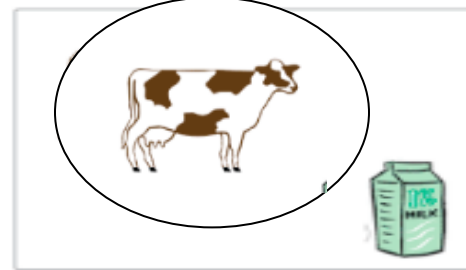
1. A bench is \_\_\_\_\_ than a chair.
2. A lunch box is \_\_\_\_\_ than a water bottle.
3. A drum is \_\_\_\_\_ than a violin.
4. A carrot is \_\_\_\_\_ than beans.
5. An apple is \_\_\_\_\_ than a gooseberry.
6. A banana is \_\_\_\_\_ than a watermelon.
7. A scooty is \_\_\_\_\_ than a lorry.
8. A football is \_\_\_\_\_ than a pen.

**II) Circle the heavier items:**



1)



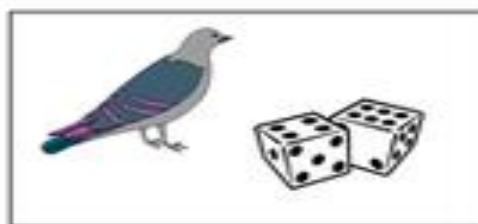


2)



3)




**HW - Circle the heavier items:**




**III) Circle the lighter items:**

1)



2)








3)















**HW - Circle the lighter items:**



IV) Arrange the following items from heaviest to lightest:

			
<input type="text" value="3"/>	<input type="text" value="1"/>	<input type="text" value="2"/>	<input type="text" value="4"/>
			
<input type="text" value="1"/>	<input type="text" value="3"/>	<input type="text" value="4"/>	<input type="text" value="2"/>
			
<input type="text" value="4"/>	<input type="text" value="2"/>	<input type="text" value="3"/>	<input type="text" value="1"/>

HW - Arrange the following items from lightest to heaviest:

		
_____	_____	_____
		
_____	_____	_____
		
_____	_____	_____
		
_____	_____	_____