

Lesson 2 – Counting in groups

Number names:

All numbers can be written in words.

57 – fifty seven

29 – twenty nine

34 – thirty four

12 – twelve

45 – forty five

100 – one hundred

115 – one hundred and fifteen

147 – one hundred and forty seven

151 – one hundred and fifty one




163 – one hundred and sixty three

188 – one hundred and eighty eight

194 – one hundred and ninety four

200 – two hundred

Write the numbers that comes before:



Write the numbers that comes after:

8	9	13	14	20	21
37	38	68	69	25	26
41	42	82	83	94	95
99	100	109	110	113	114
135	136	147	148	159	160
161	162	179	180	197	198

Order of numbers:

Ascending order:

When numbers are written in the order of the smallest to biggest number that is 1,2,3,4,5 It is known as increasing order or ascending order.

Arrange the following numbers in ascending order:

- a) 7,4,1,5 – 1,4,5,7
- b) 17,20,11,16,14 – 11,14,16,17,20
- c) 73,32,65,50,12 – 12,32,50,15,73
- d) 19,63,48,10,94 – 10,19,48,63,94
- e) 47,20,42,54,33 – 20,33,42,47,54


Descending order:

When numbers are written in the order of the biggest to smallest number that is 5,4,3,2,1 It is known as decreasing order or descending order.


Arrange the following numbers in descending order:

- a) 2, 6,9,5,8 – 9,8,6,5,2
- b) 20,15,18,10,12 – 20,18,15,12,10
- c) 19,42,67,55,24 – 67,55,42,24,19
- d) 31,16,58,82,70 – 82,70,58,31,16
- e) 76,91,21,64,80 – 91,80,76,64,21


Write how many pairs are there?



HW – Count and write:



- _____ flowers, _____ pairs




- _____ balls, _____ pairs



- _____ shoes, _____ pairs




- _____ ice-creams,
_____ pairs




- _____ trees,
_____ pairs


Write how many groups are there?




- 6 pencils, 2 groups



- 9 pencils, 3 groups



- 12 pencils, 4 groups




- 15 pencils,
5 groups


HW – Count and write:



- _____ stars, _____ groups



- _____ stars, _____ groups



- _____ stars, _____ groups



- _____ stars, _____ groups



- _____ stars, _____ group

Write more or less:

1)




Less




More

2)



More



Less

3)



Less



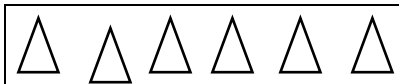
More

4) 5 is less than 7


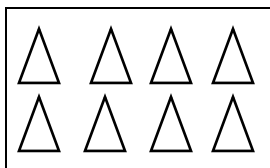
10 is more than 5

HW- Write more or less:

1)



2)



3)



4) 3 is _____ than 5.

12 is _____ than 6.

5) 25 is _____ than 40.

18 is _____ than 22.

Circle the correct answer:

- 1. Number of teeth in your mouth
 - More than 40
 - Less than 40 ✓

- 2. Number of matchsticks in a match box.
 - More than 25 ✓
 - Less than 25

- 3. Number of seeds in an orange.
 - More than 50
 - Less than 50 ✓

- 4. Number of spoke in one cycle wheel.
 - More than 10 ✓
 - Less than 10

Look at the picture and write:



How many are pulling the carrot? 6.

Who was the first one to pull it? An old man.

The cat is the 5th in the line.

Who was the fourth one to pull the carrot? Dog.