

KENDRIYA VIDYALAYA GANDHIGRAM – DINDIGUL

LESSON – 4

SUBTRACTION

I) COUNT AND WRITE THE NUMBERS:-



3	-	1	=	2
---	---	---	---	---



4	-	2	=	2
---	---	---	---	---




2	-	1	=	1
---	---	---	---	---




5	-	1	=	4
---	---	---	---	---

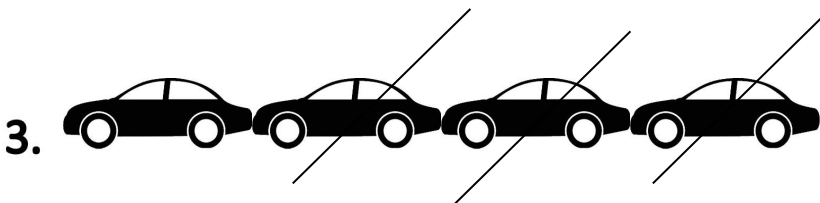
II) CROSS OUT THE PICTURES SHOULD BE TAKEN AWAY AND WRITE THE NUMBER OF PICTURES LEFT IN THE BOX:-




6	-	1	=	5
---	---	---	---	---



3	-	2	=	1
---	---	---	---	---




4	-	3	=	1
---	---	---	---	---



5	-	2	=	3
---	---	---	---	---

5.



6	-	4	=	2
---	---	---	---	---

III) SUBTRACT AND WRITE THE DIFFERENCE IN THE BOX:-

1. $9 - 2 =$

2. $10 - 8 =$

3. $7 - 4 =$

4. $4 - 3 =$

IV) SUBTRACT THE FOLLOWING:-

1)
$$\begin{array}{r} 6 \\ (-) 4 \\ \hline \\ \hline \end{array}$$

2)
$$\begin{array}{r} 8 \\ (-) 3 \\ \hline \\ \hline \end{array}$$

3) 9

4) 7

(-) 3

(-) 2

V) SOLVE THE PROBLEMS:-

1. Deepak has 4 pencils. His brother takes away 2 pencils. How many pencils are left with Deepak?

Number of pencils Deepak had = 4

Number of pencils taken by his brother = (-) 2

2

The number of pencils left with Deepak is 2.

2. Sheela has 6 balls. She gives 2 balls to her friend . How many balls are left with Sheela?

Number of balls sheela had = 6

Number of balls given to friend = (-) 2

4

The number of balls left with Sheela is 4.