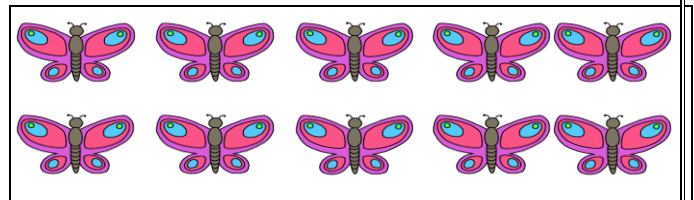
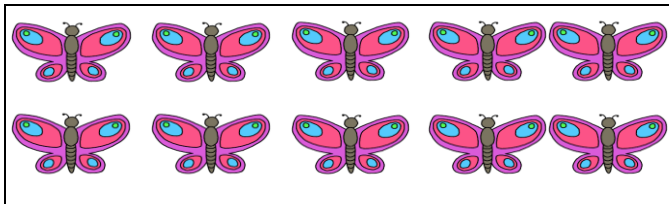
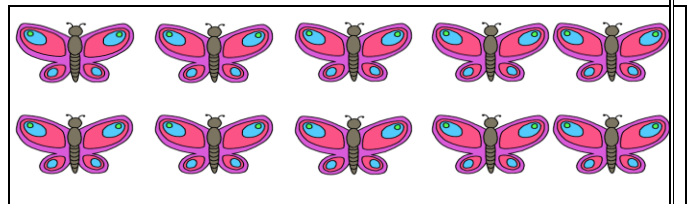
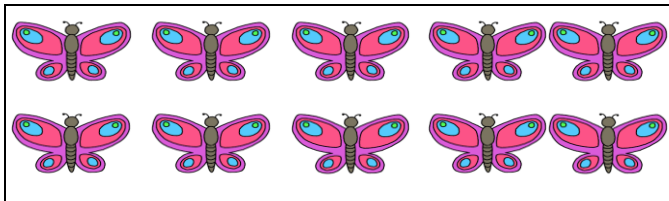


**KENDRIYA VIDYALAYA
GANDHIGRAM, DINDIGUL**

Name: _____
Std: II- _____
Topic: Counting in Tens & Patterns

Subject: Maths
Month: August
Competency: Ability to compute

I) Fill in the blanks:



In the morning, Bala counted his butterflies

1) How many boxes of 10 butterflies are there? _____

2) How many butterflies are there in all? $40 + 3 =$ _____

In the evening, Bala again counted his butterflies

