

KENDRIYA VIDYALAYA GANDHIGRAM - DINDIGUL

NAME : _____


CLASS : I A & B

DATE :

TOPIC : SUBTRACTION



FORMING NUMBERS

I) SUBTRACT AND WRITE THE NUMBERS:-

1.  -  = _____

2.  -  = _____

3.  -  = _____

4.  -  = _____

5.  -  = _____

PROBLEM SOLVING ABILITY

1) 5

(-) 3

2) 4

(-) 2

3) 7

(-) 3

4) 3

(-) 2

5) 6

(-) 4

6) 8

(-) 3

7) 9

(-) 3

8) 7

(-) 2

KENDRIYA VIDYALAYA GANDHIGRAM - DINDIGUL

NAME : _____

CLASS : I A & B

DATE :

TOPIC : SUBTRACTION

ABILITY TO COMPUTE

I) FILL IN THE BLANKS:-

1. $7 - 2 =$ _____

2. $6 - 4 =$ _____

3. $5 - 2 =$ _____

4. $9 - 8 =$ _____

5. $10 - 5 =$ _____

6. $6 - 3 =$ _____

7. $8 - 5 =$ _____

8. $4 - 3 =$ _____


9. $3 - 0 =$ _____

10. $7 - 4 =$ _____

PROBLEM SOLVING ABILITY

II) SOLVE THE FOLLOWING PROBLEMS:-

1. 5 birds were flying in the sky. If 3 of them sat on the tree, how many are still flying in the sky?



Ans: _____ birds are still flying in the sky.

2. A fruit seller has 9 watermelons. He sells 7 out of them in a day. How many watermelons are still left ?



Ans: _____ watermelons are left.