

KENDRIYA VIDYALAYA GANDHIGRAM – DINDIGUL

CLASS : I

SUBJECT : MATHS

LESSON – 7

NUMBERS FROM 21 TO FIFTY

I) WRITE THE NUMBERS NAME FROM 21 TO 50

- 21 - Twenty one
- 22 - Twenty two
- 23 - Twenty three
- 24 - Twenty four
- 25 - Twenty five
- 26 - Twenty six
- 27 - Twenty seven
- 28 - Twenty eight
- 29 - Twenty nine
- 30 - Thirty
- 31 - Thirty one
- 32 - Thirty two
- 33 - Thirty three
- 34 - Thirty four
- 35 - Thirty five
- 36 - Thirty six
- 37 - Thirty seven
- 38 - Thirty eight

- 39 - Thirty nine
40 - Forty
41 - Forty one
42 - Forty two
43 - Forty three
44 - Forty four
45 - Forty five
46 - Forty six
47 - Forty seven
48 - Forty eight
49 - Forty nine
50 - Fifty

II) FILL IN THE BLANKS WITH CORRECT NUMBER:-

1. 3 tens = 30
2. 5 tens = 50
3. 7 tens = 70
4. 2 tens = 20
5. 1 ten = 10
6. 10 tens = 100

III) WRITE THE FOLLOWING NUMBERS IN THE EXPANDED FORM.

1. 35 = 3 tens + 5 ones = 30 + 5
2. 15 = 1 ten + 5 ones = 10 + 5
3. 29 = 2 tens + 9 ones = 20 + 9

$$4. 46 = 4 \text{ tens} + 6 \text{ ones} = 40 + 6$$

$$5. 37 = 3 \text{ tens} + 7 \text{ ones} = 30 + 7$$

IV) COMPARE THE FOLLOWING PAIRS OF NUMBERS BY WRITING $>$, $<$ AND $=$.

$$1. 23 > 19$$

$$2. 89 < 98$$

$$3. 49 < 94$$

$$4. 55 = 55$$

$$5. 31 < 48$$

V) ADD THE FOLLOWING:-

$$1. \quad 30$$

$$(+)\quad 40$$

—

70

—

$$2. \quad 45$$

$$(+)\quad 54$$

—

99

—

$$3. \quad 51$$

$$(+)\quad 12$$

—

63

V) SUBTRACT THE FOLLOWING:-

$$\begin{array}{r} 1. \quad 89 \\ (-) \quad 27 \\ \hline 62 \end{array}$$


$$\begin{array}{r} 2. \quad 25 \\ (-) \quad 14 \\ \hline 11 \end{array}$$

$$\begin{array}{r} 3. \quad 95 \\ (-) \quad 42 \\ \hline 53 \\ \hline \end{array}$$

LESSON- 9

DATA HANDLING

* Data handling refers to collecting and sorting data or facts in order to keep a record.



Count the shapes in the above picture.



Name the shapes
that occurs the most

that occurs the least

These children are friends.

Count the number of letters in each name-word.


Names							Number of letters
S	A	L	M	A			<input type="text"/>
J	O	S	E	P	H		<input type="text"/>
A	R	U	N				<input type="text"/>
C	H	I	N	T	U		<input type="text"/>
G	E	E	T	A			<input type="text"/>
A	S	H	A				<input type="text"/>
S	U	B	B	U			<input type="text"/>
A	H	M	A	D			<input type="text"/>
R	A	V	I				<input type="text"/>

How many names have four letters


How many names have five letters

How many names have six letters

Count and write :-



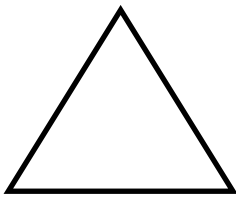
Number of  = _____

Number of  = _____


COLOUR THE FOLLOWING:-




In red



In blue



In pink



In green

