

**KENDRIYA VIDYALAYA
GANDHIGRAM, DINDIGUL**

Name: _____

Subject: EVS

Std: II-

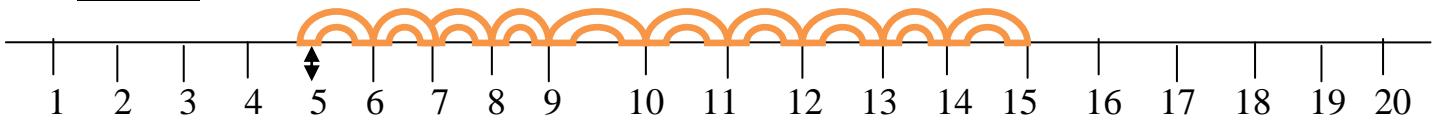
Month: August

Topic: Counting in Tens & patterns

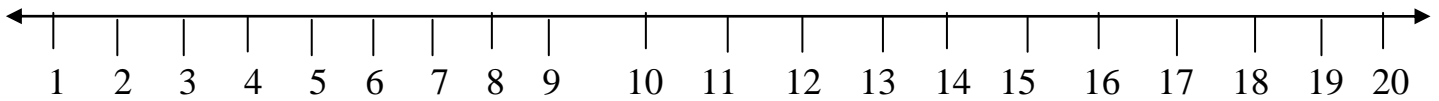
Competency: Knowledge

I) Addition by number lines:

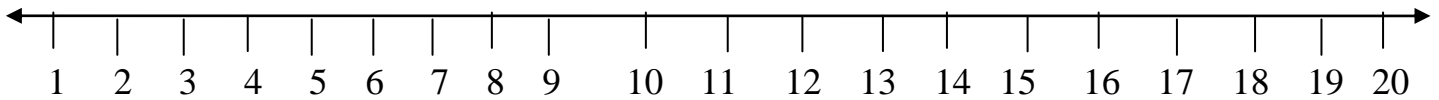
Model: $5 + 10 = \underline{\quad 15 \quad}$



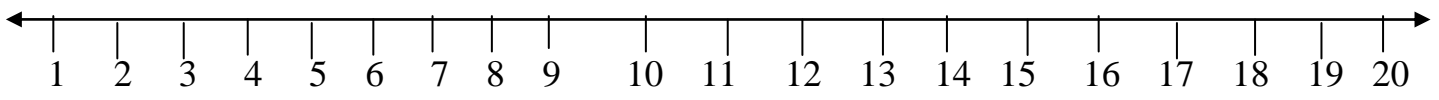
i) $3 + 7 = \underline{\quad \quad}$



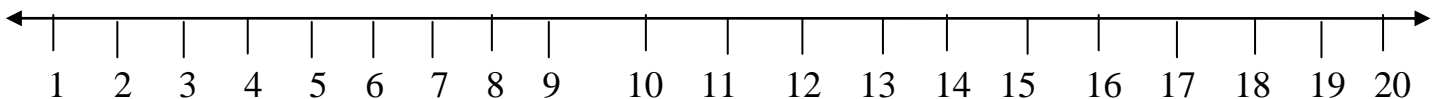
ii) $9 + 10 = \underline{\quad \quad}$



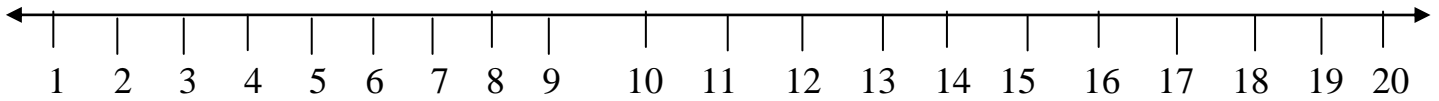
iii) $8 + 10 = \underline{\quad \quad}$



iv) $6 + 10 = \underline{\quad \quad}$

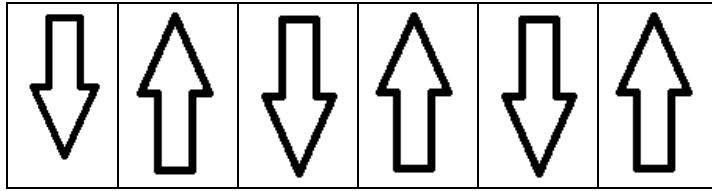


v) $7 + 10 = \underline{\quad \quad}$

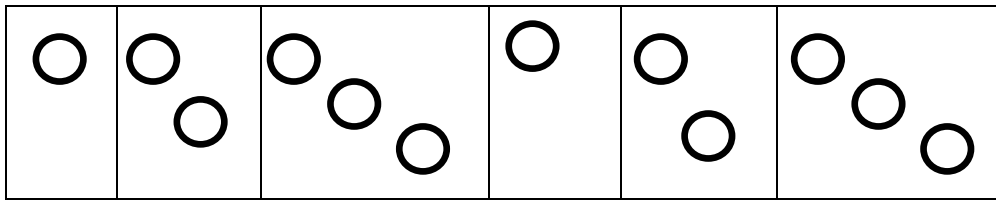


II) Write the pattern

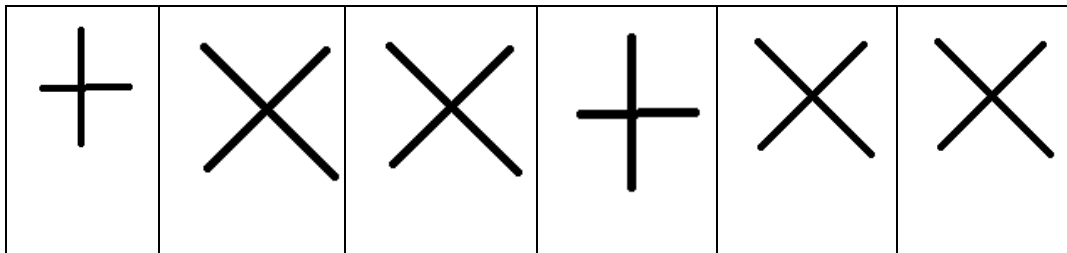
MODEL:



= AB



= _____



= _____

III) Complete the pattern:

