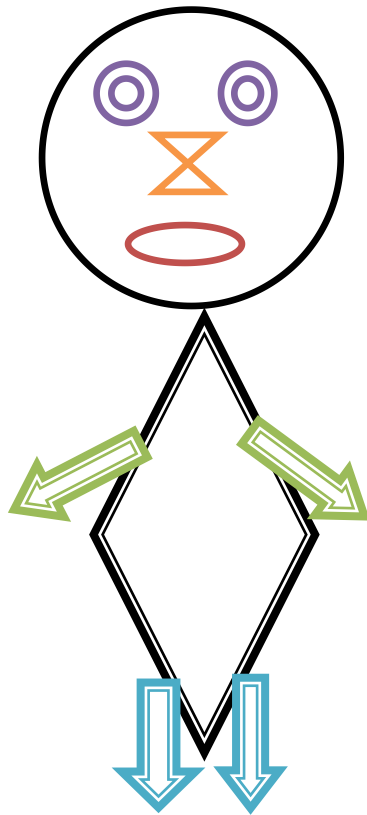


**Subject: Maths**


**Class: II**

**Topic: Foot prints**

By using triangle, circle, diamond, ellipse, arrows we make a doll.



**Match it:**




Duck



Cat



Dog



Lizard



Sheep



Tiger



Crow



Crane



Elephant

## Jugs and Mugs

Ramu makes lemon Juice. He fill a bucket full of lemon drink. By

using Glass  and Jug  . Jug is fill with 4  of lemon.

The bucket fill with 5  of lemon.

- 1) How many glasses need to fill the 2 jugs? 8 glasses.
- 2) How many jugs need to fill the 3 buckets? 15 jugs.
- 3) How many glasses need to fill 2 buckets? 40 glasses.

**Choose the correct answer:**

Approximately how much time it will take to fill the following vessels by a taps

- a) A bucket  
4 minutes                      9 minutes                      13 minutes
- b) A cup  
3 seconds                      5 seconds                      7 seconds
- c) A mug  
3 seconds                      5 seconds                      2 minutes
- d) A water tank  
25 minutes                      40 minutes                      1 hour 30 minutes
- e) A one litre bottle  
4 seconds                      6 seconds                      12 seconds

**Fill in the blanks:**

If 1 cup of orange juice costs Rs 20/ . What will be the cost of

- a) 3 cups of juice = Rs \_\_\_\_\_
- b) 7 cups of juice = Rs \_\_\_\_\_
- c) 2 cups of juice = Rs \_\_\_\_\_
- d) 5 cups of juice = Rs \_\_\_\_\_

**Tick the correct one:**


Among the following items which one do you drink?

Poori  
Grapes  
Juice  
Biscuit

Tea  
Cheese  
Potato  
Milk

Idly  
Water  
Wheat  
Spinach


**Arrange in increasing order capacity:**



3



2



1



1



3



2



2



1



3