

KENDRIYA VIDYALAYA, GANDHIGRAM, DINDIGUL

December(2016-17)

Name: Class: II-Subject: EVS

Topic: Solar system and Earth directions

IDENTIFICATION

I) Write true or false:

- 1. The Sun gives us light during the day. []**
- 2. Moon reflects light from the Saturn. []**
- 3. Venus planet is farthest from the Sun. []**
- 4. Sun rises in the west direction. []**
- 5. The Saturn planet looks yellowish color. []**

II) Choose the best answer:

- 1. Moon is a _____ . (Natural satellite/artificial satellite).**
- 2. The sun is a _____ . (planet/star)**
- 3. We have _____ directions. (five/four)**
- 4. _____ is smallest planet in the solar system.(Mercury/Earth)**
- 5. _____ planet is called as red planet. (mars/venus).**

DISCOVERY OF FACTS

I) Fill in the blanks:

1. Saturn planet looks _____ in colour.
2. The Sun sets in the _____.
3. Sun helps us to finding the _____.
4. _____ is the 6th planet in the solar system.
5. _____ is the largest planet of the solar system.

III) Answer the following questions:

1) Name the planet which has ring.

2) Name the four directions:

3) In which direction does the sun rise and set?

4) Why is the sun important for us?

5) Name the eight planets:

KENDRIYA VIDYALAYA, GANDHIGRAM, DINDIGUL

December(2016-17)

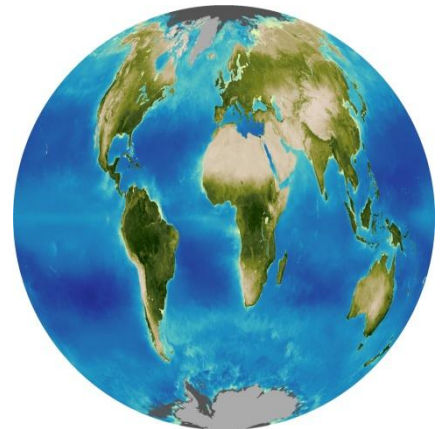


Name:


Class: II- Subject: EVS


Topic: Solar system and Earth directions

OBSERVATION

I) Write their names under each pictures:







II) Name the following:

1. It shines during the day. _____

2. The light during the night-time. _____

3. It twinkles in the sky. _____