




# KENDRIYA VIDYALAYA, GANDHIGRAM, DINDIGUL


**Class: II A & B**

**Month: December**

**Subject: Maths**




## Topic: Give and Take

Kinnaree sells  beads in the bazar. She sells loose  beads and  necklaces of 10 beads each. Now you find how many necklaces and loose beads the other children take.

Name of the children	Beads	Necklaces of 10 beads	Loose beads
<b>Ravi</b>	<b>12</b>		
<b>Harini</b>	<b>17</b>		
<b>kousik</b>	<b>24</b>	 	
<b>Selvi</b>	<b>35</b>	  	 
<b>Kumar</b>	<b>31</b>	  	

**Add the following numbers:**

**1) How many beads are taken by Ravi and Harini together?**

<b>Ravi</b>			<b>1</b>	<b>2</b>
<hr style="border: 1px solid black;"/>				
<b>Harini</b>			<b>1</b>	<b>7</b>
<hr style="border: 1px solid black;"/>				
			<b>2</b>	<b>9</b>
<hr style="border: 1px solid black;"/>				





**2) How many beads are taken by Ravi and kousik together?**

<b>Ravi</b>			<b>1</b>	<b>2</b>
<hr style="border: 1px solid black;"/>				
<b>kousik</b>			<b>2</b>	<b>4</b>
<hr style="border: 1px solid black;"/>				
			<b>3</b>	<b>6</b>
<hr style="border: 1px solid black;"/>				





**3) How many beads are taken by Ravi and kousik together?**

<b>Ravi</b>			<b>1</b>	<b>2</b>
<hr style="border: 1px solid black;"/>				
<b>selvi</b>			<b>3</b>	<b>5</b>
<hr style="border: 1px solid black;"/>				
			<b>4</b>	<b>7</b>
<hr style="border: 1px solid black;"/>				

**4) How many beads are taken by Ravi and kumar together?**

<b>Ravi</b>			<b>1</b>	<b>2</b>
<b>kumar</b>			<b>3</b>	<b>1</b>
				<hr/>
				<b>4</b>
				<hr/>
				<b>3</b>

**5) How many beads are taken by harini and kumar together?**

<b>harini</b>			<b>1</b>	<b>7</b>
<b>kumar</b>			<b>3</b>	<b>1</b>
				<hr/>
				<b>4</b>
				<hr/>
				<b>8</b>





**6) How many beads are taken by kousik and selvi together?**

<b>kousik</b>			<b>2</b>	<b>4</b>
<b>selvi</b>			<b>3</b>	<b>5</b>
				<hr/>
				<b>5</b>
				<hr/>
				<b>9</b>

**7) How many beads are taken by kousik and kumar together?**

<b>kousik</b>			<b>2</b>	<b>4</b>
<b>kumar</b>			<b>3</b>	<b>1</b>
			<hr/>	<hr/>
			<b>5</b>	<b>5</b>
			<hr/>	<hr/>



**8) How many beads are taken by selvi and kumar together?**



<b>selvi</b>			<b>3</b>	<b>5</b>
<b>kumar</b>			<b>3</b>	<b>1</b>
			<hr/>	<hr/>
			<b>6</b>	<b>6</b>
			<hr/>	<hr/>

**9) How many beads are taken by harini and kousik together?**

<b>kousik</b>			<b>1</b>	<b>4</b>
<b>harini</b>			<b>1</b>	<b>7</b>
			<hr/>	<hr/>
			<b>4</b>	<b>1</b>
			<hr/>	<hr/>

10) How many beads are taken by Selvi and Harini together?

selvi  

Harini  

1	
3	5
1	7
<hr/>	
5	2
<hr/>	

How many more beads?


A)

		
Selvi	3	5
kousik	2	4
--	1	1



B)

		
kousik	2	4
Ravi	1	2
--	1	1



C)

		
Harini	1	7
Ravi	1	2
--	0	5

D)

		
Selvi	3	5
Ravi	1	2
--	2	3



E)

		
<b>Selvi</b>	<b>3</b>	<b>5</b>
<b>Kumar</b>	<b>3</b>	<b>1</b>
--	<b>0</b>	<b>5</b>


F)

		
<b>Selvi</b>	<b>2</b> <del><b>3</b></del>	<b>15</b> <del><b>5</b></del>
<b>Harini</b>	<b>1</b>	<b>7</b>
--	<b>1</b>	<b>8</b>


G)

		
<b>Kumar</b>	<b>2</b> <del><b>3</b></del>	<b>11</b> <del><b>1</b></del>
<b>Harini</b>	<b>1</b>	<b>7</b>
--	<b>1</b>	<b>4</b>



H)

		
<b>Kousik</b>	<b>1</b> <del><b>2</b></del>	<b>14</b> <del><b>4</b></del>
<b>Harini</b>	<b>1</b>	<b>7</b>
--	<b>0</b>	<b>7</b>

I)

		
<b>Kumar</b>	<b>2</b> <del><b>3</b></del>	<b>11</b> <del><b>1</b></del>
<b>Kousik</b>	<b>2</b>	<b>4</b>
--	<b>0</b>	<b>7</b>

J)

		
<b>Kumar</b>	<b>2</b> <del><b>3</b></del>	<b>11</b> <del><b>1</b></del>
<b>Ravi</b>	<b>1</b>	<b>2</b>
--	<b>1</b>	<b>8</b>

**Practice time: Also do it in your mind**

- 1) Tanish has 34 pencils. Siya has 22 pencils. How many pencils are there in all?**
- 2) In mukesh's class, there are 41 English story books 34 Hindi story books. How many story books are there in all?**
- 3) Sakshi had 27 fruits. She ate 18 fruits. How many fruits are left?**
- 4) Dharun has 85 marbles. Arun has 55 marbles. How many marbles do they have in all?**
- 5) Nisha 26 bangles. Sushi has 15 bangles. How many more bangles does Nisha have?**

### **Venkatesh's canteen**

**Helps venkatesh to make the bills.**

**a)**

	<b>Rupees</b>	
<b>Dosa</b>	<b>12</b>	<b>3</b>
<b>Uttapam</b>	<b>2</b>	<b>8</b>
<b>+</b>	<b>5</b>	<b>1</b>

**b)**

	<b>Rupees</b>	
<b>Idly</b>	<b>11</b>	<b>5</b>
<b>Coffee</b>	<b>0</b>	<b>8</b>
<b>+</b>	<b>2</b>	<b>3</b>

c)

	Rupees	
	1	
<b>Dahi vada</b>	<b>2</b>	<b>5</b>
<b>Chilli Rice</b>	<b>2</b>	<b>8</b>
<b>+</b>	<b>5</b>	<b>3</b>

d)

	Rupees	
<b>Soup</b>	<b>2</b>	<b>3</b>
<b>Veg. Rice</b>	<b>4</b>	<b>5</b>
<b>+</b>	<b>6</b>	<b>8</b>

**Practice time:**

- 1) Sekar has 56 rupees. He bought a ball for 12 rupees. How much money is left with him?**
- 2) Soni bought biscuits for 48 rupees and a packet of chips for 15 rupees. How much money will she pay?**
- 3) Rajith had 85 rupees. He spent 32 rupees at the fair. How much money is he left with him?**